




Function machine inputs

1. Work out the input numbers of these three function machines.




In	Out
	32
	48
	560
	720
	64
	80

In	Out
	35
	21
	42
	700
	63
	56

In	Out
7	49
	25
	36
	81
	16
	64

2. This machine does two things to each number. Complete the table.

In	Step 1	Step 2 and out
3	18	22
10		
9		
1		
15		
11		



I can look at the output of a function machine and work out the input

