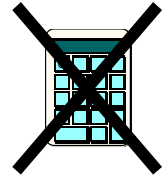


## S1 (M) Maths Homework 2


- 1) Tom buys 2 bags of crisps at 45p each and a bottle of juice for £1.30.



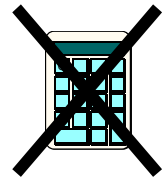
How much change does he get from £5?

2)

9 cm

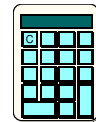


27 cm



- a) Find the area of this rectangle.  
b) Find the perimeter of this rectangle.

- 3) A group of 3 friends win £50 000 on the lottery. They split the money equally. How much do they each receive?



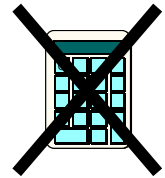
- 4) Round these numbers to the nearest 10.

a) 1324      b) 25      c) 423      d) 99



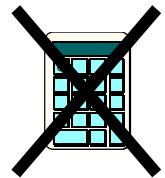
- 5) Round these numbers to one decimal place.

a) 189.1983      b) 1.983      c) 20.231      d) 27.98743



- 6) Use rounding to estimate the answers.

a)  $19 \times 39$       b)  $14 \times 11$       c)  $21 \times 399$       d)  $99 \times 101$



- 7) Estimate:

- a) the thickness of your jotter.  
b) the length of your bedroom.  
c) the height of the main school block.  
d) the height of your Maths teacher.



REMEMBER YOUR UNITS