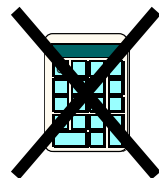


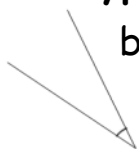
S1 (M) Maths Homework 7

- 1) John buys 3 CDs at £8.99 each and a poster at £4.50.
How much change does he get from two £10 and one £20 note?

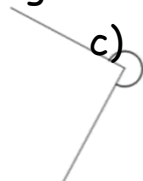


- 2) Name the **type** of angle

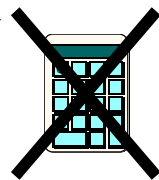
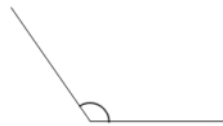
a)



b)



c)



- 3) Name the **type** of angle

a) 25°

b) 90°

c) 250°

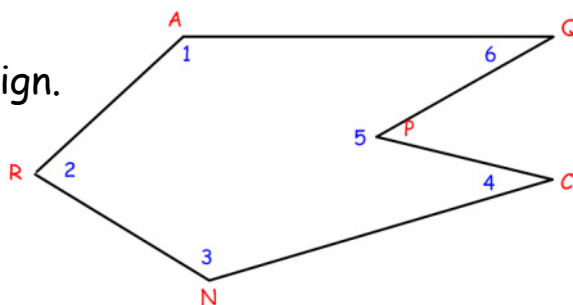
d) 180°

e) 120°

f) 2°



- 4) **Name** angles 1 - 5.
Don't forget angle sign.



- 5) A bowl of fruit measures 3.45kg when placed on a scales.
If the bowl weighs 0.78kg, what is the weight of the fruit?

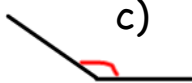


- 6) **Estimate**, then measure these angles.

a)



b)



c)




- 7) Find the next three terms in the sequences below.

a) 15, 10, 5

b) -1, -3, -5

c) 10, 3, -4



- 8) Find the entries in the third row of this table of temperatures ($^\circ\text{C}$).

At 4pm	8	0	-2	2	-1	1
At 4am	3	-3	-3	-2	-11	-1
Fall ($^\circ\text{C}$)						

